

Updates for the Week of 1/1/24

Homework: READ

Mon 1/1	Tues 1/2	Wed 1/3	Thu 1/4	Fri 1/5
No School - Happy New Year!!!	Day 6 - PE <i>wear sneakers</i>	Day 1 - Music	Day 2 - Art and Library <i>Library books due</i>	Day 3 - PE <i>wear sneakers</i>

Updates:

- Please dress your child in layers and heavy sweatshirts/jackets so that they stay warm during outdoor recess. Thank you!
- I hope you all had a healthy and merry winter break!!
- Please hand in the December HW Choice Board and please make sure your child's name and your signature is on the choice board. Thank you!
- The January HW Choice Board will be coming home this week.

Concepts For This Week:

- Phonics
 - Diphthongs:
 - aw & au
 - oi & oy
- Reading
 - Nonfiction project
- Writing
 - Nonfiction writing assessment
- Math (optional worksheets for practice are attached)
 - Reviewing place value
 - Reading and writing three-digit numbers
 - Continuing to practice time and money
 - On Google Classroom, under "Math," the "Virtual Manipulatives" material has a free virtual manipulative for time on Toy Theater.
 - Google Classroom also has an instructional video about "touch points" for counting coins, along with the link for a free coin game called, Coin Bubble, on Tang Math.
- Social Studies
 - Expressing what we know about rural, suburban, and urban communities
- Positivity Project Trait: Optimism

Have a great week, Partners!

Best,

Miss Alexander






December 2023

Myers Corners Student Book Swap

Through the generosity of a wonderful Myers Parent we have a fantastic new accessory in the Myers Corners Lobby. A wonderful new bench sits inside the Myers Lobby and the best part of it is that it opens to some great space for storage and we want that space to hold gently used books that our families no longer need so that other students can take advantage of and enjoy those books!

Our first thought to make it manageable is to have 3 boxes inside the bench. 1 for K-1-2 level books, 1 for 3-4 level books and 1 for 5-6 level books that you would like to donate (and eventually swap) please send them in with your student and we will add them to the soon to be collection! Once the bench becomes populated with books you can feel free to grab some "new to you" books as well.



Name:

NO Regrouping

Addition

Standard Algorithm

TANG MATH

A.

$$\begin{array}{r} 21 \\ + 57 \\ \hline \end{array}$$

B.

$$\begin{array}{r} 31 \\ + 21 \\ \hline \end{array}$$

C.

$$\begin{array}{r} 10 \\ + 78 \\ \hline \end{array}$$

D.

$$\begin{array}{r} 12 \\ + 86 \\ \hline \end{array}$$

E.

$$\begin{array}{r} 52 \\ + 46 \\ \hline \end{array}$$

F.

$$\begin{array}{r} 11 \\ + 88 \\ \hline \end{array}$$

Name:

Regrouping

Addition
Standard Algorithm

TANG MATH

A.

$$\begin{array}{r} 83 \\ + 28 \\ \hline \end{array}$$

B.

$$\begin{array}{r} 59 \\ + 91 \\ \hline \end{array}$$

C.

$$\begin{array}{r} 89 \\ + 39 \\ \hline \end{array}$$

D.

$$\begin{array}{r} 68 \\ + 65 \\ \hline \end{array}$$

E.

$$\begin{array}{r} 74 \\ + 67 \\ \hline \end{array}$$

F.

$$\begin{array}{r} 19 \\ + 91 \\ \hline \end{array}$$

Name: NO Regrouping

Subtraction
Standard Algorithm

TANG MATH

A.

$$\begin{array}{r} 98 \\ - 16 \\ \hline \end{array}$$

B.

$$\begin{array}{r} 96 \\ - 12 \\ \hline \end{array}$$

C.

$$\begin{array}{r} 49 \\ - 25 \\ \hline \end{array}$$

D.

$$\begin{array}{r} 45 \\ - 35 \\ \hline \end{array}$$

E.

$$\begin{array}{r} 47 \\ - 34 \\ \hline \end{array}$$

F.

$$\begin{array}{r} 76 \\ - 25 \\ \hline \end{array}$$

Name:

Regrouping

Subtraction
Standard Algorithm

TANG MATH

A.

$$\begin{array}{r} 91 \\ - 75 \\ \hline \end{array}$$

B.

$$\begin{array}{r} 52 \\ - 18 \\ \hline \end{array}$$

C.

$$\begin{array}{r} 58 \\ - 39 \\ \hline \end{array}$$

D.

$$\begin{array}{r} 31 \\ - 15 \\ \hline \end{array}$$

E.

$$\begin{array}{r} 92 \\ - 66 \\ \hline \end{array}$$

F.

$$\begin{array}{r} 51 \\ - 18 \\ \hline \end{array}$$

Name: _____

Time (P)

A.



What time is it? ____:____

B.




What time is it? ____:____

C.



What time is it? ____:____


D.



What time is it? ____:____

Name: _____

A.



What time is it? ____:____

B.



What time is it? ____:____

C.



What time is it? ____:____

D.



What time is it? ____:____

Name: _____

A.



What time is it? ____:____

B.



What time is it? ____:____

C.



What time is it? ____:____

D.



What time is it? ____:____

Name: _____

A.



What time is it? ____:____

B.



What time is it? ____:____

C.



What time is it? ____:____

D.



What time is it? ____:____

Name: _____

A.

Write the value of each coin:



_____ ¢

_____ ¢



_____ ¢

_____ ¢

What is the total value? _____ ¢

B.

Write the value of each coin:



_____ ¢

_____ ¢



_____ ¢

_____ ¢

What is the total value? _____ ¢

C.

Write the value of each coin:



_____ ¢

_____ ¢

_____ ¢



_____ ¢

_____ ¢

What is the total value? _____ ¢

D.

Write the value of each coin:



_____ ¢

_____ ¢

_____ ¢



_____ ¢

_____ ¢

_____ ¢

What is the total value? _____ ¢